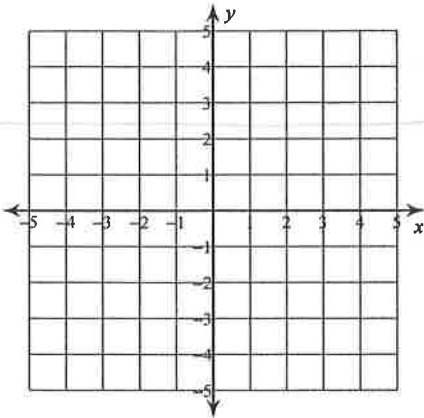


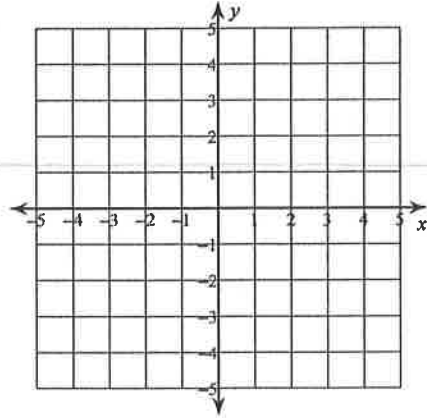
Solving Systems of Equations by Graphing

Solve each system by graphing.

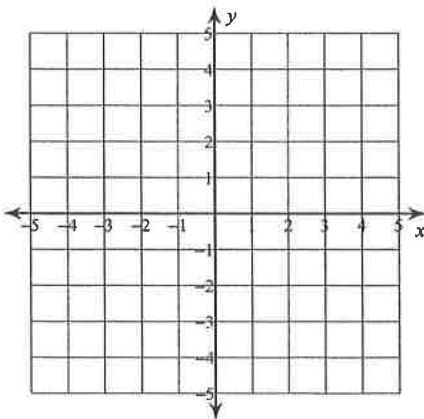
1) $y = \frac{1}{3}x - 4$
 $y = -\frac{7}{3}x + 4$



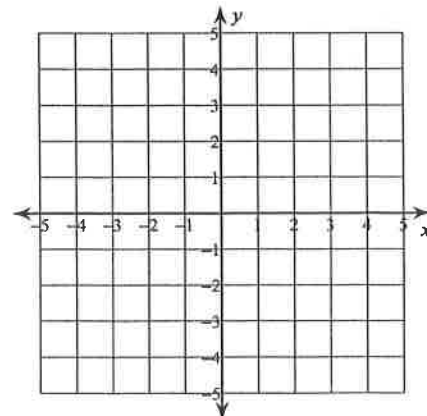
2) $y = \frac{1}{3}x + 3$
 $y = 2x - 2$



3) $y = -7x - 3$
 $y = 4$

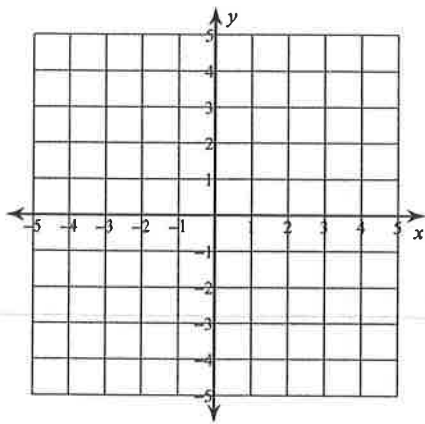


4) $y = -\frac{2}{3}x - 2$
 $y = -\frac{8}{3}x + 4$



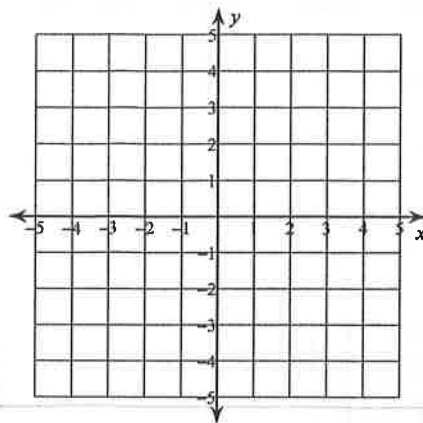
$$5) y = -\frac{2}{3}x - 3$$

$$y = -\frac{2}{3}x + 4$$



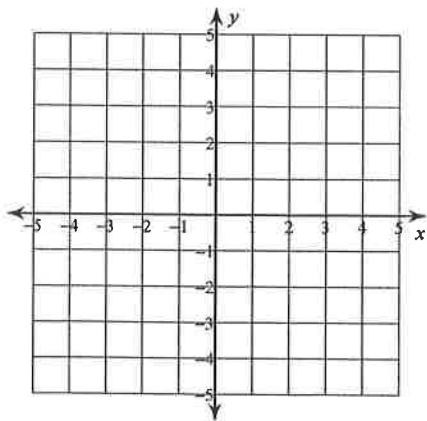
$$6) y = -6x - 3$$

$$y = -x + 2$$



$$7) y = -\frac{3}{4}x + 4$$

$$y = \frac{1}{2}x - 1$$



$$8) y = \frac{5}{2}x - 4$$

$$y = -x + 3$$

